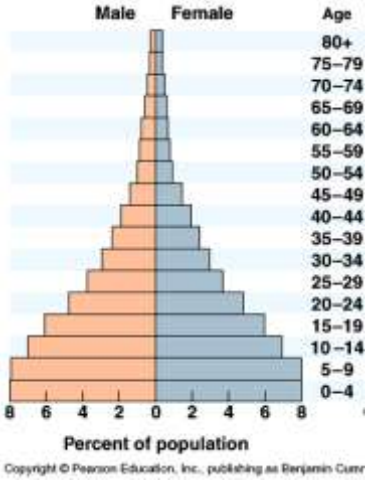
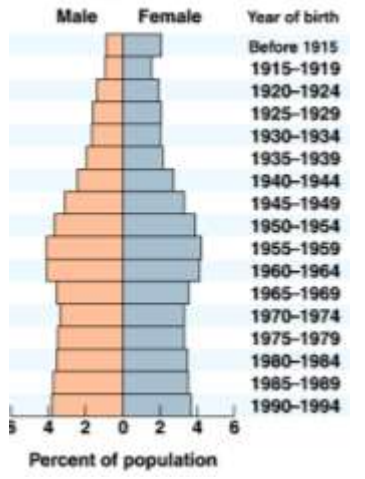
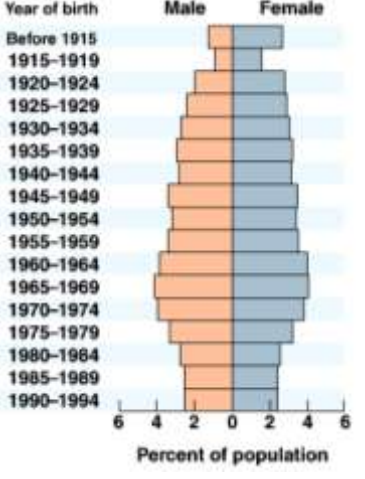


Complete the following table using your notes, books and/or note cards. Please answer in bullet form and be specific.

Pyramid	Level of Growth	DTM Stage	Population Characteristics	Economic Characteristics
 <p>Male Female Age</p> <p>80+ 75-79 70-74 65-69 60-64 55-59 50-54 45-49 40-44 35-39 30-34 25-29 20-24 15-19 10-14 5-9 0-4</p> <p>8 6 4 2 0 2 4 6 8</p> <p>Percent of population</p> <p><small>Copyright © Pearson Education, Inc., publishing as Benjamin Cummings</small></p> <p>Possible Country:</p>				
 <p>Male Female Year of birth</p> <p>Before 1915 1915-1919 1920-1924 1925-1929 1930-1934 1935-1939 1940-1944 1945-1949 1950-1954 1955-1959 1960-1964 1965-1969 1970-1974 1975-1979 1980-1984 1985-1989 1990-1994</p> <p>5 4 2 0 2 4 6</p> <p>Percent of population</p> <p>Possible Country:</p>				
 <p>Year of birth Male Female</p> <p>Before 1915 1915-1919 1920-1924 1925-1929 1930-1934 1935-1939 1940-1944 1945-1949 1950-1954 1955-1959 1960-1964 1965-1969 1970-1974 1975-1979 1980-1984 1985-1989 1990-1994</p> <p>6 4 2 0 2 4 6</p> <p>Percent of population</p> <p>Possible Country:</p>				

